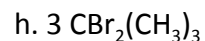
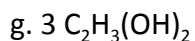
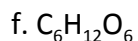


Name _____

Counting Atoms

Directions: Draw a *circle* around the **coefficients** and put a *triangle* around the **subscripts**.



Directions: Name each of the elements/polyatomic ions in the following problems. Also tell *how many atoms* of each element are in the molecules or group of atoms.

